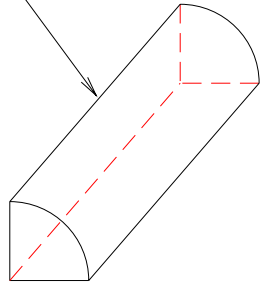
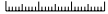
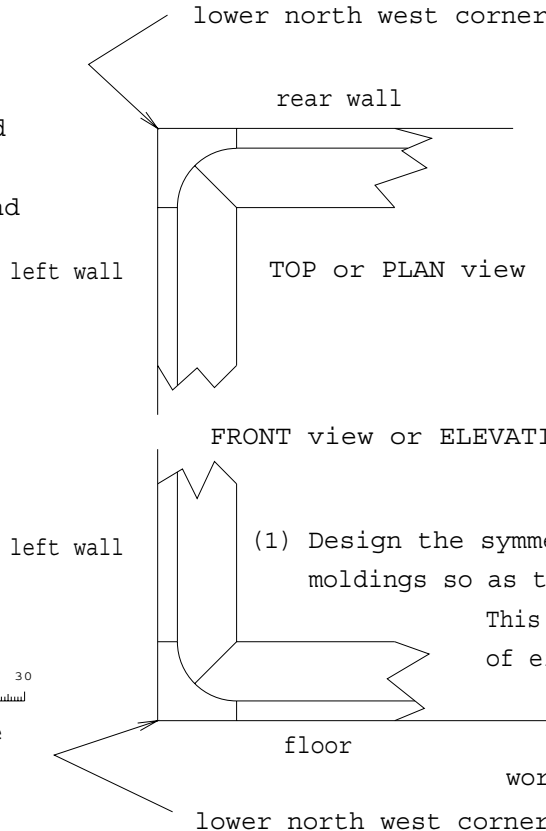


GEOMETRIC CONSTRUCTION EXERCISE 1, 2007

(2) Discuss how the job would differ if quarter round moldings were used instead.



0 10 20 30

 scale



(1) Design the symmetrical double cut on the three moldings so as to fit smoothly into the corner.

This will require similar compound cuts of either hand; identical on each molding. Note that the two cuts are made with a single set-up so the work piece and saw tilt angle do not change with ABCD on the table.

